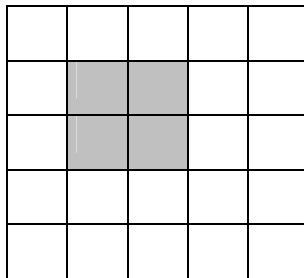
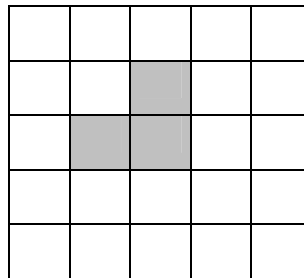



1. Faça uma construção com cubos a partir das seguintes figuras



Vista de frente




Vista de topo
(planta)




Vista lateral direita


2. Faça uma construção com cubos a partir das seguintes figuras



Vista de frente




Vista de topo
(planta)

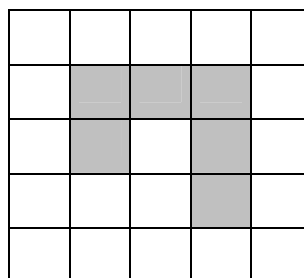


Vista lateral direita


3. Faça uma construção com cubos a partir das seguintes figuras



Vista de frente



Vista de topo
(planta)

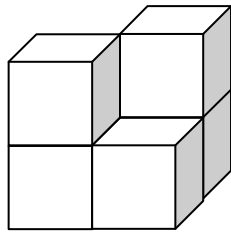


Vista lateral direita

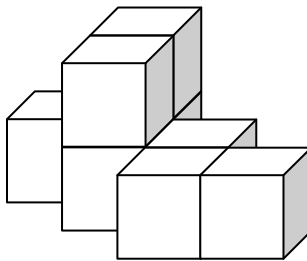
4. Qual o volume de cada uma das construções obtidas?

Soluções

1.



2.



3.

